






Addition and Subtraction



Use the number values for the school pictures below to do the math problems. Good luck!

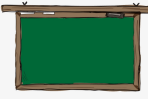



1.  +  =



2.  -  =

3.  +  =


4.  -  =

5.  +  =


6.  -  =

7.  +  =

8.  -  =

9.  +  =

10.  +  =

11.  -  =

12.  +  =